

प्रश्नपुस्तिका पर्यवेक्षकांनी सांगितल्याशिवाय उघडू नये...

Do not open this booklet until asked to do so...

# RATIONALIST TALENT SEARCH EXAM 2017

## RTSE

### Question Booklet

STD : II

वर्ग: 2 रा

Roll No.

--	--	--	--	--	--	--	--	--	--

Date of Examination : 12 February 2017 Sunday

### परीक्षार्थीसाठी सुचना / Guidelines for the Candidate

1. आपल्याच नावाची व परिक्षा क्रमांकाची उत्तर पत्रिका मिळाल्याची खात्री करून घ्यावी.  
Check to make sure that you have received the appropriate answer sheet of your name and roll number.
2. परिक्षा सुरु होण्यापूर्वी विद्यार्थ्यांना त्यांच्या संपूर्ण माहितीची खात्री करण्यासाठी 30 मिनिटे अधिक वेळ देण्यात येईल.  
You will get additional 30 minutes to check and make sure about the information about yourself on the Answer Sheet before the start of the exam.
3. सदर प्रश्नपुस्तिकेमध्ये एकूण 100 प्रश्न असून प्रत्येक प्रश्नासाठी 2 गुण आहेत.  
This question booklet contains 100 questions each question carries 2 marks.
4. सर्व प्रश्न सोडविणे आवश्यक आहे. चुकीच्या उत्तराबद्दल मिळालेल्या गुणातून कुठल्याही प्रकारचे गुण वजा केले जाणार नाहीत.  
All questions are compulsory. There is no negative marking.
5. आपल्याच वर्गाची प्रश्नपुस्तिका मिळाल्याची खात्री करून घ्यावी.  
Check to make sure that you have received the appropriate test booklet for your standard.
6. पर्यायामध्ये केवळ एकच उत्तर बरोबर आहे. बरोबर उत्तरासाठी एकच पर्याय निवडावा.  
There is only one correct answer. Choose only one option for an answer.
7. उत्तराचा पर्याय रंगविण्यासाठी केवळ काळा/ निळा रंगाचा बॉलपेनच वापरावा.  
To mark your choice of answers by darkening the circles in the Answer Sheet, use a **Blue/Black Ball, Pen only. Eg.**

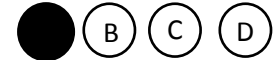
**Q. x : - Fill in the blanks.**

**My father went..... To buy some milk.**

a) there                      b) their                      c) They're                      d) here

As the correct answer is option a) you must darken the circle corresponding Q. x

To option a) in the Answer Sheet



8. परिक्षा संपल्यावर तुमची उत्तरपत्रिका पर्यवेक्षकाकडे परत करावी.  
Return the Answer Sheet to the invigilator at the end of the exam.
9. आपल्या परिक्षा क्रमांक प्रश्नपुस्तिकेवर सुध्दा लिहावा व सदर प्रश्नपुस्तिका परिक्षा कालावधीनंतर आपल्या सोबत न्यावी.  
Write your Roll No. on the Question Paper too and take it home for future reference.

Visit [www.rtsexam.com](http://www.rtsexam.com) for Answer key after 8 days

1. Identify the pictures



- A) Snail
- B) Fly
- C) Crab
- D) Fish

2. Identity pronoun in the sentence given below.

My mother loves me.

- A) Loves
- B) Mother
- C) My
- D) None of these

3. Find the rhyming word of LOVE.

- A) Below
- B) Above
- C) Come
- D) none of these

4. Choose the word which is opposite to the given word.

Closed

- A) Wide
- B) Ajar
- C) Shut
- D) Open

5. Identify the picture:



- A) Television
- B) Window
- C) Sink
- D) Mirror

6. Fill in the blanks with suitable option.

He wears \_\_\_\_\_ clothes.

- A) Her
- B) him
- C) His
- D) none of these

7. Find the plural number of the word written in Capital Letters.

PEN

- A) Penses
- B) Pens
- C) Pense
- D) none of these

8. Correct the spelling of the given word.

ABSANT

- A) Asbent
- B) Absent
- C) Abnset
- D) none of these

9. \_\_\_\_\_

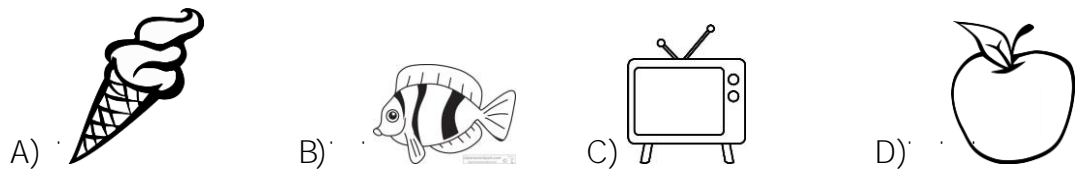
- A) \_\_\_\_\_
- B) \_\_\_\_\_
- C) \_\_\_\_\_
- D) \_\_\_\_\_

10. \_\_\_\_\_

- A) \_\_\_\_\_
- B) \_\_\_\_\_
- C) \_\_\_\_\_
- D) \_\_\_\_\_



18. Which one of the following is not a food item?



19. Which one of the following is true?

- A) Wolf is a domestic animal
- B) Camel is wild animal
- C) Horse is a wild animal
- D) Wolf is a wild animal

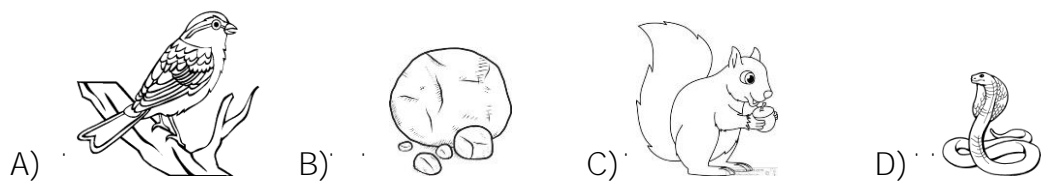
20. Woolen clothes are used in:

- A) Summer
- B) Rains
- C) Cold region
- D) all of these

21. The largest animal on earth at present is \_\_\_\_\_.

- A) Elephant
- B) Whale
- C) Crocodile
- D) none of these

22. Which one of the following is a non living thing?



23. How does the snake eat frog?

- A) Chewing
- B) Swallowing
- C) Crushing
- D) none of these

24. How many states of water found on the earth?

- A) Four
- B) Two
- C) Three
- D) Five

25. The organ shown in the figure below is called \_\_\_\_\_.



- A) x-ray      B) hearing      C) ear      D) eye

What is the function of the organ given in the figure below?



- A) Hearing      B) Reading      C) Walking      D) Watching

26. The moving air is called \_\_\_\_\_.

- A) Rain      B) Weather      C) Flood      D) Wind

Moving air is called \_\_\_\_\_.

- A) Rain      B) Weather      C) Flood      D) Wind

27. Air is \_\_\_\_\_.

- A) like banana      B) like apple      C) like tree      D) we cannot see air

How does air look like?

- A) Like Banana      B) Like Apple  
C) Like Tree      D) We cannot see air

28. Raksha Bandhan is the festival of \_\_\_\_\_.

- A) Sisters      B) Brothers      C) Parents      D) Brothers and Sisters

Raksha Bandhan is the festival of \_\_\_\_\_.

29. Write the tens of the given number \_\_\_\_\_.

- A) 7      B) 8      C) 78      D) none of these

Write the tens of the given number \_\_\_\_\_.

- 78  
A) 7      B) 8      C) 78      D) none of these

° œ ' > - ' V \$ © W ' ° ¥ ' ~ μ μ ' © â © ' ® » !  
 μ » - ' 2 μ œ ' n . | © ' . 1 3

. 1 3	. 3 a ' o
—μ	T X
™ ' ' ©	U S
~ ¶	V X
° ™ ©	V S
—°	U X

Instructions Question No 30 to 33 refer this table.

Favorite Subject of kids

Subject	No. of Kids
Arts	15
Maths	20
Sports	35
Music	30
Kabaddhi	25

30. μ » - ' 2 μ œ ' ° . | © ' n . | © ' . 1 3 ' — ' ' © 2
- A) ™ ' ' ©      B) ~ ¶      C) ° ™ ©      D) —° |

Which is most favorite subject among kids?

- A) Maths      B) Sports      C) Music      D) Kabaddhi

31. μ » - ' 2 μ œ ' ° . | © ' — 2 ' n . | © ' . 1 3 ' — ' ' © 2
- A) ~ ¶      B) ™ ' ' ©      C) ° ™ ©      D) —μ

Which is least favorite subject among kids?

- A) Sports      B) Maths      C) Music      D) Arts

32. U X 2 μ - ' n . | ' ' ' . 1 3 ' — ' ' © 2
- A) —° |      B) ~ ¶      C) ™ ' ' ©      D) ° ™ ©

Which Subject is liked by 25 kids?

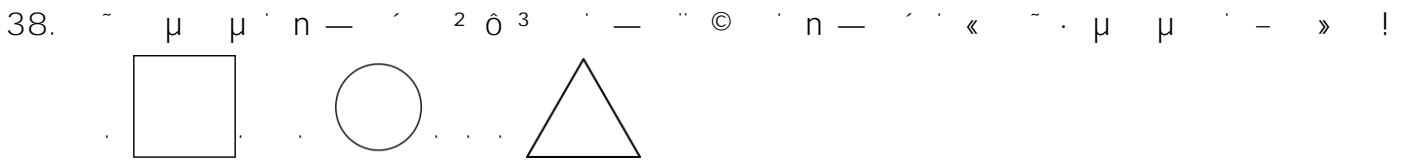
- A) Kabaddhi      B) Sports      C) Maths      D) Music

33. —© ' 2 μ - ' ™ ' ' © ' » ' . 1 3 ' n . | © 2
- A) V X      B) T X      C) V S      D) U S

How many kids like Maths?

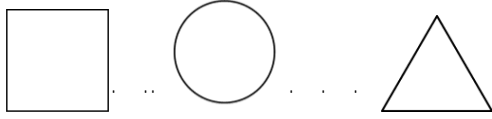
- A) 35      B) 15      C) 30      D) 20






- A) Square      B) Circle      C) Triangle      D) Square

Which shape is not shown here?




- A) Rectangle      B) Circle      C) Triangle      D) Square

39.







- A) 12      B) 72      C) 30      D) 49



- Which of the following numbers is not in the tree?  
 A) Twelve      B) Seventy Two      C) Thirty nine      D) Forty nine





40. U [





Following given is the digit multiplication form. To get the correct answer which option will select

$2 \times 8$



41.  $WZ + T =$

$WZ + T =$

- A) X Y                      B) Y Y                      C) Y X                      D) Y W

Add the following numbers and select the correct option

$47 + 18$

- A) 56                      B) 66                      C) 65                      D) 64

42.  $87 - 42 =$

$87 - 42 =$

- A) VX                      B) U U                      C) WX                      D) V W

Subtract the following numbers and select the correct answer option.

$87 - 42$

- A) 35                      B) 22                      C) 45                      D) 34

43.  $2 \text{ Weeks} =$  \_\_\_\_\_ days.

- A) T U                      B) T W                      C) U T                      D) T Y

2 Weeks makes \_\_\_\_\_ days.

- A) 12                      B) 14                      C) 21                      D) 16

44.  $641 - 4 \text{ Tens} =$  \_\_\_\_\_

- A) Y [ T                      B) U WT                      C) Y T                      D) Y S T

$641 - 4 \text{ Tens} =$  \_\_\_\_\_

- A) 681                      B) 241                      C) 61                      D) 601

45. In which city the Lal Mahal is situated?

- A) « ý μ                      B) | ° ™                      C) ®                      D) – ™®

In which city the Lal Mahal is situated?

- A) Delhi                      B) Aurangabad                      C) Pune                      D) Nagpur

46. Who is the chief minister of Maharashtra?

- A) Raosaheb Danve                      B) Sharad Pawar  
 C) Eknath Khadse                      D) Devendra Fadnavis

47. Lalita babar is associated with \_\_\_\_\_

- A) Cinema                      B) Dance                      C) Sports                      D) Music


48. Which is the highest mountain peak in Maharashtra?

- A) Kalsubai                      B) Salher                      C) Everest                      D) none of these

49. Where is Gateway of India Situated?

- A) Delhi                      B) Mumbai                      C) Agra                      D) Lucknow

50. Which one of the following is Computer.



51. Who writes book?

- A) Poet                      B) Author                      C) Learner                      D) none of these

52. Who flies aeroplane

- A) Doctor                      B) Police                      C) Teacher                      D) none of these

53. Which is the highest and prestigious award presented by Government of Maharashtra State?

- A) Bharat Ratna
- B) Maharashtra Bhushan
- C) Ashok Chakra
- D) Padma Shri

Which is the highest and prestigious award presented by Government of Maharashtra State?

- A) Bharat Ratna
- B) Maharashtra Bhushan
- C) Ashok Chakra
- D) Padma Shri

54. Identify the Hockey.



55. What is the colour of the Sun?

- A) Red
- B) Blue
- C) Yellow
- D) none of these

What is the colour of the Sun?

- A) Red
- B) Blue
- C) Yellow
- D) none of these

56. What does tree give us?

- A) Potato
- B) Rice
- C) Onion
- D) Fruits

What does tree give us?

- A) Potato
- B) Rice
- C) Onion
- D) Fruits

57. What is the common thing in the bank?

- A) Money
- B) Letters
- C) Money Order
- D) Police

What is the common thing in the bank?

- A) Money
- B) Letters
- C) Money Order
- D) Police

58. Which one of the following is Sambhaji Raje ?



- A) Sambhaji Raje
- B) A man with a musical instrument
- C) A man on a horse
- D) A man in a turban

59. Which one of the following is Bhagat Singh ?

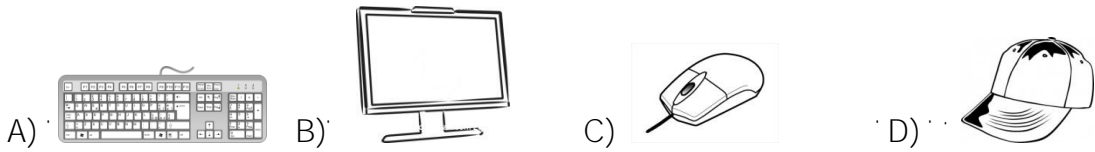


- A) Bhagat Singh
- B) A woman
- C) A man in a cap
- D) A man with glasses

60. Who teaches in the school?  
 A) Librarian B) Teacher C) Nurse D) none of these

61. How many Alt keys are there on the keyboard.  
 A) One B) Two C) Three D) Five

62. Find the odd one out



63. Who was the first chief minister of Maharashtra State?  
 A) Sharad Pawar B) Yashwantrao Chavhan  
 C) Vasanttrao Naik D) none of these

64. Which is the longest river in Maharashtra?  
 A) Godavari B) Kaveri C) Tapi D) Ganga

65. Who is the Governor of Maharashtra?  
 A) C. Vidyasagar Rao B) S.M. Krushna  
 C) K. Shankarnarayan D) D.Y. Patil

66. Which one of the following is head of State?  
 A) Chief Secretary B) Chief Minister C) Governor D) Prime Minister

67. ມີ ຈຳນວນ ຈຳນວນ ຈຳນວນ ຈຳນວນ 2

- A) ມີ ຈຳນວນ ຈຳນວນ ຈຳນວນ ຈຳນວນ B) ມີ ຈຳນວນ ຈຳນວນ ຈຳນວນ ຈຳນວນ C) ມີ ຈຳນວນ ຈຳນວນ ຈຳນວນ ຈຳນວນ D) ມີ ຈຳນວນ ຈຳນວນ ຈຳນວນ ຈຳນວນ

Where do Live Lion?

- A) Cave B) Stable C) Ambarkhana D) Cow Shed

68. ມີ ຈຳນວນ ຈຳນວນ ຈຳນວນ ຈຳນວນ 2

- A) ມີ ຈຳນວນ ຈຳນວນ ຈຳນວນ ຈຳນວນ B) ມີ ຈຳນວນ ຈຳນວນ ຈຳນວນ ຈຳນວນ C) ມີ ຈຳນວນ ຈຳນວນ ຈຳນວນ ຈຳນວນ D) ມີ ຈຳນວນ ຈຳນວນ ຈຳນວນ ຈຳນວນ

Which one of the following is means of Transportation?

- A) Television B) Computer C) Bus D) Mobile

69. ມີ ຈຳນວນ ຈຳນວນ ຈຳນວນ ຈຳນວນ

- A) ມີ ຈຳນວນ ຈຳນວນ ຈຳນວນ ຈຳນວນ B) ມີ ຈຳນວນ ຈຳນວນ ຈຳນວນ ຈຳນວນ C) ມີ ຈຳນວນ ຈຳນວນ ຈຳນວນ ຈຳນວນ D) ມີ ຈຳນວນ ຈຳນວນ ຈຳນວນ ຈຳນວນ

Find the vegetable from the following?

- A) Mango B) Watermelon C) Brinjal D) Grapes

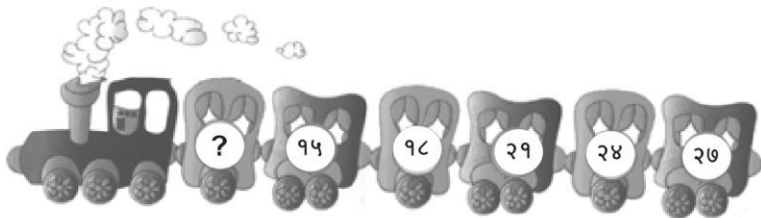
70. ມີ ຈຳນວນ ຈຳນວນ ຈຳນວນ ຈຳນວນ

- A) ມີ ຈຳນວນ ຈຳນວນ ຈຳນວນ ຈຳນວນ B) ມີ ຈຳນວນ ຈຳນວນ ຈຳນວນ ຈຳນວນ C) ມີ ຈຳນວນ ຈຳນວນ ຈຳນວນ ຈຳນວນ D) ມີ ຈຳນວນ ຈຳນວນ ຈຳນວນ ຈຳນວນ

Who will be the your mothers mother to your dad?


- A) Mother-in-law B) Paternal Ant C) Aunty D) Maternal Ant

71. ມີ ຈຳນວນ ຈຳນວນ ຈຳນວນ ຈຳນວນ



- A) U T B) T Y C) T U D) T X

Find the missing number



- A) 21 B) 16 C) 12 D) 15

72. ມີ ຈຳນວນ ຈຳນວນ ຈຳນວນ ຈຳນວນ

- A) ມີ ຈຳນວນ ຈຳນວນ ຈຳນວນ ຈຳນວນ B) ມີ ຈຳນວນ ຈຳນວນ ຈຳນວນ ຈຳນວນ C) ມີ ຈຳນວນ ຈຳນວນ ຈຳນວນ ຈຳນວນ D) ມີ ຈຳນວນ ຈຳນວນ ຈຳນວນ ຈຳນວນ

Which one of the following is a name of a season?

- A) January B) Winter C) Tuesday D) Leap Year

73. . 1 | © μ · n ¥ . ' 2 » - ' — ' © 2

- A) - ÿ » ° ´ B) - . ´ C) ° ö ¤ ° ´ D) y™ ¤

What is the <sup>the</sup> month of a year?

- A) November B) February C) September D) August

74. . ° ™ © ' š ¤ — ' { ¶ ~ !

- A) ° ° ´ B) ™ ¤ ´ C) — D) ®³ —

Find the odd one out.

- A) Flute B) Guitar C) Scissor D) Piano

75. j ´ ' ° » μ ' ° ° ' ú » ¤ μ Ž ' ° , μ ' ° ® ' ú » ¤ μ Ž ' ° ® μ

- A) ° » B) ° ° C) ° ® D) ² — |

If 'Lion' is called 'rabbit', monkey is called 'snake', then 'snake' is \_\_\_\_\_

- A) Lion B) Rabbit C) Snake D) Monkey

76. ~ μ μ ' - ' n — © œ ® ð³ © μ ' © ° ° — ° ' « ° μ ' © q ´ ´ n — ñ³ ² — ' , — !

Find the water image for the question figure from the answer figure.

प्रश्न-आकृती



Question figure

उत्तर-आकृत्या / Answer Figure



- A) B) C) D)

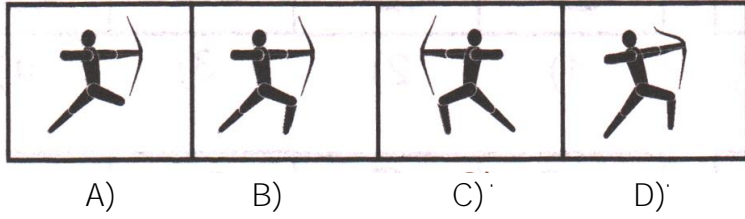
77. ~ μ μ ' - © ' - ' n — © , ' © © © © " » ° » ° j ¶ ~ ´ ´ n — © ' ®³ β © - ' - . j !

Out of the given group of figures find out an exact similar / identical figure to the given figure

— ' n — © ' Question Figure

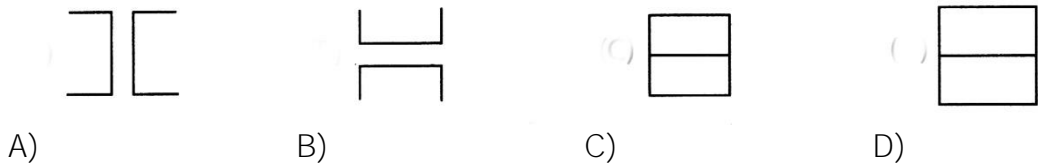
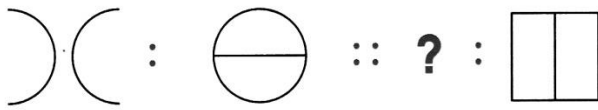


q ' n -ñ 3' " Answer Figure




78.

There is a certain relationship between the pair of figures on the either side of :: Identify relation between pair and find the missing figure.



° œ- " Instructions

Observe the given figure carefully and answer the question below.



उजवा / Right

79.

Which clown is fifth from the right end?  
 A) E                      B) G                      C) C                      D) A

80.

Clown E is to the immediate right of the clown \_\_\_\_\_  
 A) G                      B) B                      C) C                      D) A





87. 3 11 12 1 2



- A) 3:30      B) 3:15      C) 3:45      D) 3:45

This clock shows:



- A) 4.10      B) 3.15      C) 3.30      D) 3.45

88. Largest number using the digit 4,8 and 3 is \_\_\_\_\_

- A) 483      B) 438      C) 834      D) 843

89. Fourth month of the year is \_\_\_\_\_

- A) March      B) April      C) June      D) May

90. Which number is the smallest of all?

- A) 318      B) 381      C) 518      D) 308

91. The School is from 8 to 11 am. How long is the school?

- A) 3 hrs      B) 4 hrs      C) 5 hrs      D) none of these

92. Name the machine used by the doctor to examine bones?

- A) Stethoscope      B) Thermometer      C) X-Ray Machine      D) All of these

93. Which of the following currencies is issued by the central government?



94. Which one of the following city is nickname 'The City of Spices'?

95. What is the function of the human heart?

96. Identify the healthy food?

97. Which is the biggest continent in the world?

98. We should cross the road when the traffic light is?

99. Who wrote the National Anthem Jan Gan Mana?  
 A) Rabindra Nath Tagore B) Mohammed Iqbal  
 C) Bankim Chandra Chatterjee D) Guljar

100. Which of the following insect has colourful wings?  
 A) Butterfly B) HoneyBee C) House fly D) Cockroach